


Look at these arrays

Prove these and try to show your working out



Liam found 4 ladybirds on 4 branches. How many ladybirds did he find altogether?




Finish these number sentences using the array:

$2 \times 4 = \square$

$8 \div 2 = \square$

$4 \times \square = 8$

$\square \div 4 = 2$

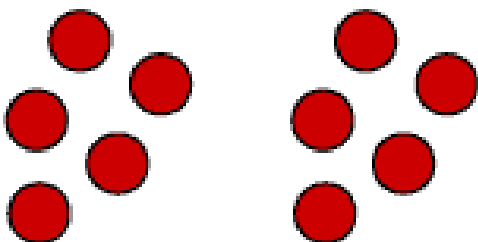


The teacher says, "This array shows 4x4!"

Tell him why he is wrong and what it does show?



This array has 4 rows and 6 columns. There are 24 dots. What else could you tell me?



Put these dots into an array.
(Think about equal rows and columns).

Challenge: Write word problems (like the one at the top) for all of your arrays.