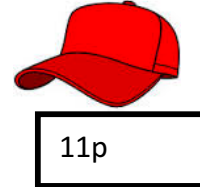

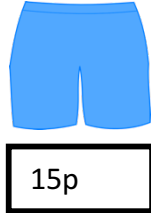
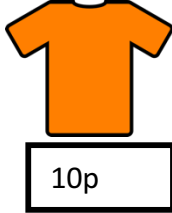

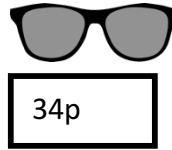
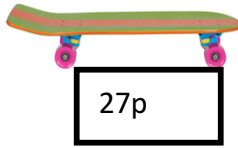
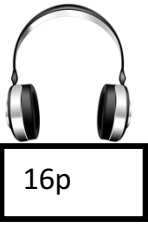


Date:

Addition with money

Name:



Bart bought a spray can for ____ and an orange t shirt for ____.
How much did he spend altogether? ____.

For Christmas, Bart was given a pair of headphones from Marge costing ____.
Lisa bought him some headphones to match, costing ____ . How much did his presents cost all together? ____.



Bart wanted to dress like Batman for Halloween, so decided to buy a mask for ____.
Millhouse lent him a cape to match, which cost ____ . How much did his costume cost in total? ____.

Bart went for a drive to see Grandpa. He wore his new chain which cost ____.
He also wore his sunglasses from Marge ____ . What is the total of these two items?



Bart saved up his pocket money to buy his skateboard, which cost him ____.
He wears his blue shorts, which cost ____, to perform his cool tricks.

Baseball is one of Bart's favourite sports. He bought a bat for ____ . He also bought a red hat for ____ to keep the sun out of his eyes. How much did he spend in total? ____

