

one pence	1p	
two pence	2p	
five pence	5p	
ten pence	10p	
twenty pence	20p	
fifty pence	50p	
one pound	£1	
two pounds	£2	

Money— Shopping Receipts

Completing this worksheet will help you to recognise what coins can be used to make different amounts of money.

Tin of Tuna	£0.21
Can of Coke	£0.50
Total	£0.71

Which 3 coins could be used to make 71p?

Refresher	£0.10
Freddo the Frog	£0.20
Total	£0.30

Which 2 coins could be used to make 30p?

Loaf of Bread	£0.50
Total	£0.50

Which 1 coin could be used to make 50p?

Chocolate Digestives	£0.55
Total	£0.55

Which 2 coins could be used to make 55p?

You pay £1.31 for a bottle of water. Circle the coins that you would use.



E1 & E2

Money — Addition

1, 2, 3, 4, 5, 6, 7, 8, 9, 10, 11, 12, 13, 14, 15, 16, 17, 18, 19, 20

Add the two amounts of money together to make the total.

For example $£0.20 + £0.07 = £0.27$

You can use the number line above to help you.

1. $1p + 2p =$

2. $2p + 5p =$

3. $1p + 3p =$

4. $7p + 8p =$

5. $2p + 10p =$

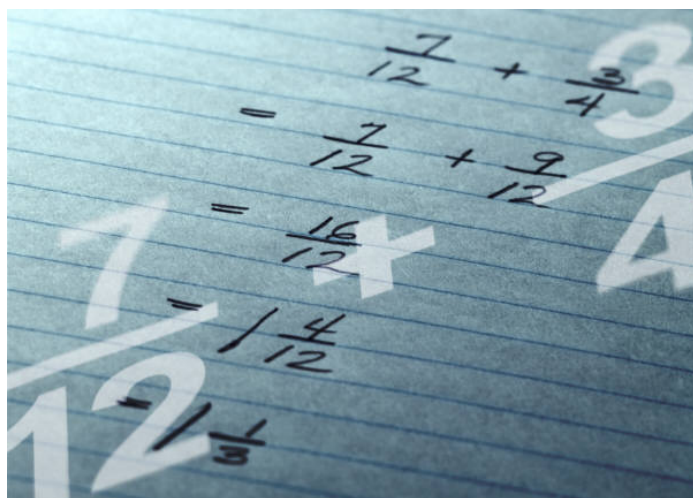
6. $5p + 5p =$

7. $1p + 9p =$

8. $10p + 4p =$


9. $2p + 6p =$

10. $3p + 4p =$



Celebrity Shopping Baskets

Cheryl, James and Mike have all been to Simon Cowell's for tea. They'd popped to their local supermarket beforehand and by mistake they've left their baskets at Simon's house.



Can you match each basket to the correct celebrity?

A	B	C


Celebrity Shopping Baskets

2. Using the price list below write down the prices for:

Item	Price
Dairy Milk	
Chicken Slices	
Pepsi	
Brown Sauce	

Pricelist

Pepsi	£1.99
Brown Sauce	£0.80
Cadburys Dairy Milk	£1.99
Chicken Slices	£1.00



E1

Celebrity Shopping Baskets

3. Mike was given £5.01 change. Circle £5.01



4. Cheryl's shopping came to £20. Circle the £20 note



5. James was given 5p change . Circle the 5 pence.



Celebrity Shopping Baskets

3. Mike was given £5.01 change. Circle £5.01



4. Cheryl's shopping came to £19.99. She pays with a £20 note how much change should she be given?

5. Matt decided to buy a new DVD for £3.00 and a CD for £5.00. What is the total cost of both items?

6. Mike decided to buy 3 new t-shirts.

Each t-shirt costs £4.

How much will Mike pay?

E1- E2

Money— Shopping Receipts

Work out the total amount of money spent on the receipt. Then work what coins you could use to pay for that amount in full. One example has been done for you.

Tuna Sandwich	£1.00
Can of Coke	£0.60
Bag of crisps	£0.50
Grapes	£0.99
Total	£3.09
Coins	
£1, £2, 5p, 2p, 2p	




Orange Juice	£1.10
Loaf of Bread	£0.70
Baked Beans	£0.54
Total	£
Coins	

Potatoes	£1.90
Carrots	£0.60
Peas	£0.99
Yorkshire Puddings	£1.70
Sausages	£2.30
Gravy	£0.97
Total	£
Coins	

Pizza	£2.99
Potato Wedges	£1.00
Larger	£4.00
Total	£
Coins	

Curry Sauce	£1.99
Rice	£0.79
Peas	£0.99
Red Pepper	£0.70
Spinach	£1.30
Diced Chicken	£2.99
Total	£
Coins	

Salad	£0.50
Baguette	£0.80
Burgers	£2.50
Ketchup	£0.99
Total	£
Coins	



E3

Money— Addition

1, 2, 3, 4, 5, 6, 7, 8, 9, 10, 11, 12, 13, 14, 15, 16, 17, 18, 19, 20

Add the two amounts of money together to make the total.

For example $£0.20 + £0.07 = £0.27$

Although you will be able to use a calculator in your exam try these sums without one in order to strengthen your mental arithmetic.

1. $£0.10 + £0.02 =$

2. $£0.10 + £0.06 =$

3. $£0.05 + £0.03 =$

4. $£0.07 + £0.01 =$

5. $£0.09 + £0.04 =$

6. $£0.05 + £0.05 =$

7. $£0.01 + £0.05 =$

8. $£0.01 + £0.07 =$

9. $£0.02 + £0.06 =$

10. $£0.03 + £0.04 =$

11. $£0.11 + £0.08 =$

12. $£0.18 + £0.02 =$

13. $£0.05 + £0.09 =$

14. $£0.11 + £0.07 =$

Celebrity Shopping Baskets

Cheryl, James and Mike have all been to Simon Cowell's for tea. They'd popped to their local supermarket beforehand and by mistake they've left their baskets at Simon's house.

A		1	
B		2	
C		3	

1. Can you match each basket to the correct celebrity?

A	B	C

Celebrity Shopping Baskets

2. Using the price list (page 12) add up the totals for:

6 pack of 2L bottles of Buxton water, 1 packet of free range chicken fillet strips, 500g brown rice.

What is the total price?.....

1 kg bag of sweet potatoes, 6 large organic eggs, 230g bar of Cadburys Dairy Milk.

What is the total price?.....

3. You are having a DVD night with 2 of your friends. You have a total budget of £15. Using the price list, what could you buy? Write down the items and their prices. What is the total amount that you've spent?

You can use a calculator.

..... £.....

..... £.....

..... £.....

..... £.....

..... £.....

Total Price £.....

How much change will you have? £.....

4. Roll the money dice 10 times. Every time you roll the dice write down the amount of money that the dice lands on. E.g. £0.05 or £2.00

Add up the 10 amounts of money. What is the total?.....

Using the price list what could you buy with this amount of money?

Celebrity Shopping Baskets Pricelist

Pepsi (2l)	£1.78
Buxton Water (6 x 2l)	£2.00
Loaf of Wholemeal Bread (Large)	£1.20
Brown Rice (500g)	£0.75
Carrots (450g)	£0.40
Oranges (900g)	£1.75
Large Tin of Heinz Beans	£0.60
Walkers Thai Sensations (150g)	£1.75
Cadburys Dairy Milk (230g)	£1.99
Free Range Chicken Fillet Strips (470g)	£2.99
Birdseye Crispy Chicken Dippers (12pk)	£1.00
Strongbow (2l)	£3.24
Multipack Carling (12 cans)	£10.00
Goodfellas 10 Inch Deep Pan Margarita Pizza (410g)	£1.50
Goodfellas 10 Inch Stuffed Crust Pepperoni Pizza (410g)	£2.00
Multipack WKD Vodka Blue (4 x 275ml bottles)	£4.00
Giant Smarties Cookies (650g)	£1.75
McCain's Oven Chips (750g)	£1.69
6 Large Free Range Eggs	£2.50
Multipack Pringles (3 x 100g)	£2.50
Old El Paso Nachos Kit (900g)	£3.50
Ben and Jerry's Caramel Chew Choo (500g)	£4.00
Doritos Variety Pack (16 x 30g)	£3.98
Thornton's Chocolate Brownies (12pk)	£2.50
Vegetable Spring Rolls (6pk)	£1.50
Bag of Sweet Potatoes (1kg)	£1.50

Money— Addition

Add the two amounts of money together to make the total. You

For example $£0.20 + £0.07 = £0.27$

Although you will be able to use a calculator in your exam try these sums without one in order to strengthen your mental arithmetic.

1. $£0.10 + £0.02 = £2.29 =$

2. $£0.10 + £0.16 + £ 0.19 =$

3. $£0.05 + £0.03 = £0.11 =$

4. $£1.07 + £0.01 + £1.98 =$

5. $£0.09 + £0.14 + £0.23 =$

6. $£0.15 + £0.05 + £0.67 =$

7. $£0.71 + £6.66 + £0.05 =$

8. $£9.52 + £6.01 + £0.77 =$

9. $£0.32 + £7.06 + £2.99 =$

10. $£4.03 + £6.24 £3.66 =$

11. $£8.11 + £7.08 + £3.16 =$

12. $£8.18 + £9.02 + £4.20 =$

13. $£5.55 + £7.79 £3.59 =$

14. $£11.11 + £69.07 + £22.42 =$

15. $£99.65 + £77.79 + £38.79 =$

16. $£17.91 + £59.50 + £20.50 =$

17. $£10.55 + £20.00 + £30.50 =$

18. $£19.99 + £50.00 + £25.89 =$

Money— Shopping Receipts

Work out the total amount of money spent on each receipt. You cannot use a calculator. Once you have done this work out what coins you could use to pay for that amount in full. One example has been done for you.



Tuna Sandwich	£1.00
Can of Coke	£0.60
Bag of crisps	£0.50
Grapes	£0.99
Total	£3.09
Coins	
£1, £2, 5p, 2p, 2p	

Orange Juice	£1.10
Loaf of Bread	£0.70
Baked Beans	£0.54
Cheese	£1.54
Total	£
Coins	

Curry Sauce	£1.99
Rice	£0.79
Peas	£0.99
Red Pepper	£0.70
Spinach	£1.30
Diced Chicken	£2.99
Total	£
Coins	

Potatoes	£1.90
Carrots	£0.60
Peas	£0.99
Onions	£0.50
Chilli	£0.40
Yorkshire Puddings	£1.70
Sausages	£2.30
Gravy	£0.97
Total	£
Coins	

Salad	£0.50
Baguette	£0.80
Burgers	£2.50
Ketchup	£0.99
Total	£
Coins	



E3- L1

Celebrity Shopping Baskets

Cheryl, James and Mike have all been to Simon Cowell's for tea. They'd popped to their local supermarket before hand and by mistake they've left their baskets at Simon's house.

A		1	
B		2	
C		3	

1. Can you match each basket to the correct celebrity?

A	B	C

Celebrity Shopping Baskets

2. Using the price list (page 17) add up the totals for:

6 pack of 2l bottles of Buxton water, 1 packet of free range chicken fillet strips 470g, 500g brown rice.

What is the total price?.....

1 kg bag of sweet potatoes, 6 large organic eggs, 230g bar of Cadburys Dairy Milk.

Add all of the items together what is the total price?.....

3. You are having a DVD night with 2 of your friends. You have a total budget of £15. Using the pricelist what could you buy? Write down the items and their price. What is the total amount that you've spent?

You cannot use a calculator.

..... £.....

..... £.....

..... £.....

..... £.....

..... £.....

Total Price £.....

How much change will you have? £.....

4. Roll the money dice 10 times. Every time you roll the dice write down the amount of money that the dice lands on. E.g. £0.05 or £2.00

Add up the 10 amounts of money. What is the total.....

Using the price list what could you be able to buy with this amount of money?

E3-L1

Celebrity Shopping Baskets Price List
--

Pepsi (2l)	£1.78
Buxton Water (6 x 2l)	£2.00
Loaf of Wholemeal Bread (Large)	£1.20
Brown Rice (500g)	£0.75
Carrots (450g)	£0.40
Oranges (900g)	£1.75
Large Tin of Heinz Beans	£0.60
Walkers Thai Sensations (150g)	£1.75
Cadburys Dairy Milk (230g)	£1.99
Free Range Chicken Fillet Strips (470g)	£2.99
Birdseye Crispy Chicken Dippers (12pk)	£1.00
Strongbow (2l)	£3.24
Multipack Carling (12 cans)	£10.00
Goodfellas 10 Inch Deep Pan Margarita Pizza (410g)	£1.50
Goodfellas 10 Inch Stuffed Crust Pepperoni Pizza (410g)	£2.00
Multipack WKD Vodka Blue (4 x 275ml bottles)	£4.00
Giant Smarties Cookies (650g)	£1.75
McCain's Oven Chips (750g)	£1.69
6 Large Free Range Eggs	£2.50
Multipack Pringles (3 x 100g)	£2.50
Old El Paso Nachos Kit (900g)	£3.50
Ben and Jerry's Caramel Chew Choo (500g)	£4.00
Doritos Variety Pack (16 x 30g)	£3.98
Thornton's Chocolate Brownies (12pk)	£2.50
Vegetable Spring Rolls (6pk)	£1.50
Bag of Sweet Potatoes (1kg)	£1.50
Cheesy Puffs	£0.99

E3-L1