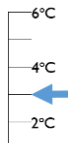
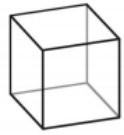

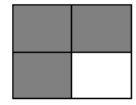


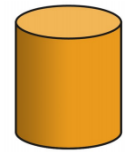


Name: _____

Date: _____

Quiz 2

1	Answer	5	Answer	9	Answer	13	Answer
47 can be written as 40 + 7. Split 47 in a different way.		Use the numbers 5, 6 and 11 to write a subtraction calculation - =		What temperature is the scale showing? 	°C	How many vertices does this shape have? 	
2	Answer	6	Answer	10	Answer	14	Answer
34+25=		5 x 7 = 35		Write the time shown on the clock. 		How many sides does a rectangle have?	
34+37=		so 35 ÷ 7 =					
3	Answer	7	Answer	11	Answer	15	Answer
31+21= a. about 30 b. about 40 c. about 50		How much of the shape is shaded? 		How many edges does this shape have? 		How many corners does a hexagon have?	
4	Answer	8	Answer	12	Answer	16	
65-20=		This is one way to make 25p  How else could you make 25p?		How many faces does this shape have? 		Draw a line of symmetry on this shape 