

Name _____

Date _____

Can you count the Mr Men and write how many there are in each box?


	<input type="text"/>
	<input type="text"/>
	<input type="text"/>
	<input type="text"/>
	<input type="text"/>
	<input type="text"/>
	<input type="text"/>
	<input type="text"/>
	<input type="text"/>
	<input type="text"/>

Self-assess your work today.
Colour in one of the faces.



Teacher assessment
of your work

Can you count up to 20 objects? Can you count at least 20 objects and know that the last number you say is how many there are altogether?



Name _____ Date _____

Can you count the Mr Men and write how many there are in each box?


	<input type="text"/>
	<input type="text"/>
	<input type="text"/>
	<input type="text"/>
	<input type="text"/>
	<input type="text"/>
	<input type="text"/>
	<input type="text"/>
	<input type="text"/>
	<input type="text"/>

Self-assess your work today.
Colour in one of the faces.



Teacher assessment
of your work

Can you count up to 20 objects? Can you count at least 20 objects and know that the last number you say is how many there are altogether?



Name _____ Date _____

Can you count the Mr Men and write how many there are in each box?

	<input type="text"/>
	<input type="text"/>
	<input type="text"/>
	<input type="text"/>
	<input type="text"/>
	<input type="text"/>
	<input type="text"/>
	<input type="text"/>
	<input type="text"/>
	<input type="text"/>


Self-assess your work today.
Colour in one of the faces.



Teacher assessment
of your work









Can you count up to 20 objects? Can you count at least 20 objects and know that the last number you say is how many there are altogether?



Name _____ Date _____

Can you count the Mr Men and write how many there are in each box?



Self-assess your work today.
Colour in one of the faces.



Teacher assessment
of your work

Can you count up to 20 objects? Can you count at least 20 objects and know that the last number you say is how many there are altogether?