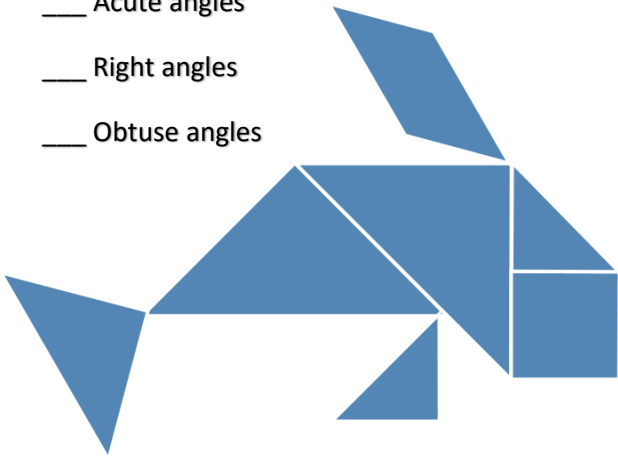


# How many of each angle can you see in these objects?


The blue fish has:

- \_\_\_ Acute angles
- \_\_\_ Right angles
- \_\_\_ Obtuse angles



The green car has:

- \_\_\_ Acute angles
- \_\_\_ Right angles
- \_\_\_ Obtuse angles



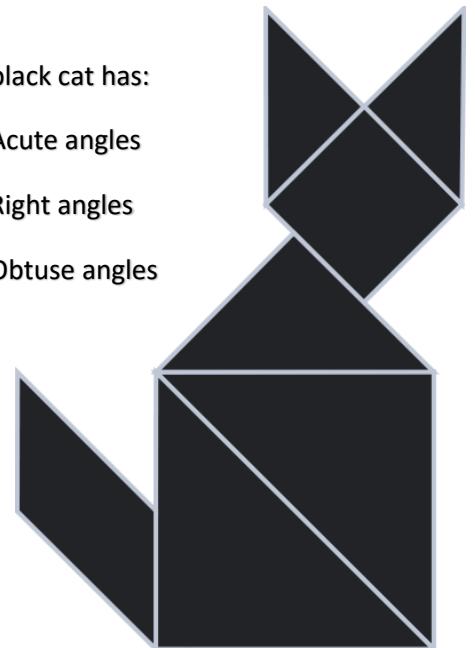
The yellow swan has:

- \_\_\_ Acute angles
- \_\_\_ Right angles
- \_\_\_ Obtuse angles



The black cat has:

- \_\_\_ Acute angles
- \_\_\_ Right angles
- \_\_\_ Obtuse angles



The multi coloured kite has:

- \_\_\_ Acute angles
- \_\_\_ Right angles
- \_\_\_ Obtuse angles

