




Hulk likes to smash but these superheroes have gone too far and ruined these maths problems. Can you work out what the missing numbers are?

MARVEL CIVIL WAR

Missing Number Problems.






$$\begin{array}{r} 125 \\ + 3325 \\ \hline 4581 \end{array}$$


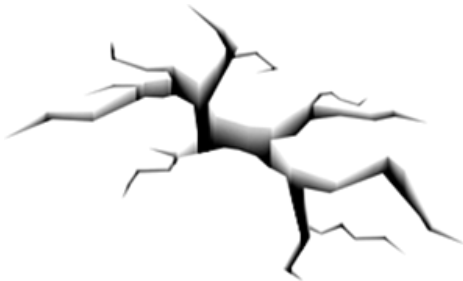





$$\begin{array}{r} 560 \\ 3211 \\ \hline 2489 \end{array}$$




$$\begin{array}{r} 34 \\ \times 5 \\ \hline 1170 \end{array}$$






$$\begin{array}{r} 75 \\ - 1332 \\ \hline 3343 \end{array}$$





$$\begin{array}{r} 780 \\ \times \\ \hline 2340 \end{array}$$

$$\begin{array}{r} 320 \\ + 3268 \\ \hline 10588 \end{array}$$