


World War II Aircraft: Addition and Subtraction.

Can you work out what numbers the World War II aircraft are covering?



3 +  = 10

10 - 7 = 


6 +  = 10

10 - 6 = 

2 +  = 10

10 - 2 = 


5 +  = 10

10 - 5 = 


1 +  = 10    m

10 - 1 = 

30 +  = 100

100 - 30 = 

60 +  = 100

100 - 60 = 

20 +  = 100

100 - 20 = 